

SLIP TEST - 1

SOCIAL STUDIES

Class : X

Max.Marks : 25

Time : 45 min.

SECTION - I

3 × 1 = 3

1. Answer All the questions.
2. Each Question Carries 1 mark.
1. Based on the relationship between the information in the first pair, Complete the Second pair
Mishmi Hills : Arunachal Pradesh
Nallamalas : _____
2. The interaction of the three Himalayan rivers and their tributaries resulted in the formation of the great northern plain. The two rivers are (i) Ganga (ii) Indus, What is the (iii) _____ river.
3. Which desert is located on the leeward side of Aravallis
a) Sahara b) Thar c) Atakama

SECTION - II

3 × 2 = 6

1. Answer All the questions.
2. Each Question Carries 2 marks.
4. Fill up the table given below.

Lake	State	Fresh / Salt Water
Kolleru		
Chilka		

5. What are the reasons for arid climate condition in the Thar desert? What are the steps taken by the government to overcome the problem of Water Scarcity ?
6. Why Himalayan rivers are Perennial in nature ?

SECTION - III

2 × 4 = 8

1. Answer All the questions.
2. Each Question Carries 4 marks.
7. Write about the Coastal plains of Peninsular India ?
8. What is the influence of the Himalayas on Indian agriculture and on Indian Climate ?

SECTION - IV

1 × 8 = 8

9. Locate the following on the outline map of India
a) Southern most tip of India.
b) Famous hill station in the Nilgiris
c) The Plateau with rich mineral resources.
d) Highest Peak in the Eastern ghats.

SLIP TEST - 2

SOCIAL STUDIES

Class : X

Max.Marks : 25

Time : 45 min.

SECTION - I

3 × 1 = 3

1. Answer All the questions.
2. Each Question Carries 1 mark.
1. Total income of the country ÷ Total Population = _____
i) GDP ii) Percapital Income iii) Human Development
2. Based on the relationship between the information in the first pair, complete the second pair.
The schooling revolution : Himachal pradesh
Kudankulam Power project : _____
3. Expand I.M.R. _____

SECTION - II

3 × 2 = 6

1. Answer All the questions.
2. Each Question Carries 2 marks.
4. What is the criterion used by the Worl Bank to classify the countries?
5. Observe the given table and answer the questions.

State	IMPR per 100	Literacy rate (%)	Net Attendance Rate
Punjab	42	77	76
Himachal Pradesh	36	84	90
Bihar	62	64	56

- i) What is net attendance rate ?
- ii) In which state the infant Mortality is least ?
6. Write any four public facilities ?

SECTION - III

2 × 4 = 8

1. Answer All the questions.
2. Each Question Carries 4 marks.
7. Write down some of the development goals for your village or town or locality.
8. Read the given paragraph and answer the questions given below.

"Let us look closely at what has come to be called "the schooling revolution in Himachal Pradesh". It has some interesting insights to offer, Particularly, how so many factors need to come together to make change possible. Development is indeed a complex phenomenon.

Q. What are the steps taken by the Government of Himachal Pradesh to achieve schooling revolutions ?

SECTION - IV

1 × 8 = 8

9. Study the following table given below and answer the given question.

Country	Per Capita Income in	Life expectancy at birth (Years)	Average years of schooling	Expected years of schooling	Human Development Index (HDI) rank in the world
Sri Lanka	5170	75.1	9.3	12.7	92
India	3285	65.8	4.4	10.7	136
Pakistan	2566	65.7	4.9	7.3	146
Mynmar	1817	65.7	3.9	9.4	149
Bangladesh	1785	69.2	4.8	8.1	146
Nepal	1137	69.1	3.2	8.9	157

- i) What is the rank of India in HDR - 2013 ?
- ii) Which organisation publishes the HDR ?
- iii) Which two countries have the same years of life expectancy?
- iv) What are the criteria used to Calculate HDR ?

SLIP TEST - 3

SOCIAL STUDIES

Class : X

Max.Marks : 25

Time : 45 min.

SECTION - I

3 × 1 = 3

1. Answer All the questions.
2. Each Question Carries 1 mark.
1. Based on the relationship between the information in the first pair, Complete the Second pair
Farmer : Agriculture
Money Lender : _____
2. The total value of goods and services produced in a country is called
i) GDP ii) Percapital Income iii) HDI
3. Which of the following doesnot 'include in GDP /
i) Income of a hotel owner
ii) Income of a retail shopkeeper
iii) Services of women in house hold duties.

SECTION - II

3 × 2 = 6

1. Answer All the questions.
2. Each Question Carries 2 marks.
4. Study the table given and answer the questions ?

Year	Agriculture	Industry	Services
1972-73	74%	11%	15%
2009-10	53%	22%	25%

- i) Which sector is providing employment for maximum number of people.
- ii) What is the percentage of workers engaged Industries sector during 2009-10 ?
5. What are the different sectors of economy ?
6. What is disguised unemployment ? Where do you find this type of under employment.

SECTION - III

2 × 4 = 8

1. Answer All the questions.
2. Each Question Carries 4 marks.
7. Classify the following list of occupation under agriculture, Industry and services sector.

Occupation	Classification (Sector)
i) Flower cultivation ii) Call centre employee iii) priest iv) worker in a factory	

8. How is the services sector different from the other sectors ? Illustrate with examples.

SECTION - IV

1 × 8 = 8

9. Define organised and unorganised sectors of economy ?
Do you think the workers in unorganised sector need protection in the issues like wage, safety and health- Why?

SLIP TEST - 4

SOCIAL STUDIES

Class : X

Max.Marks : 25

Time : 45 min.

SECTION - I

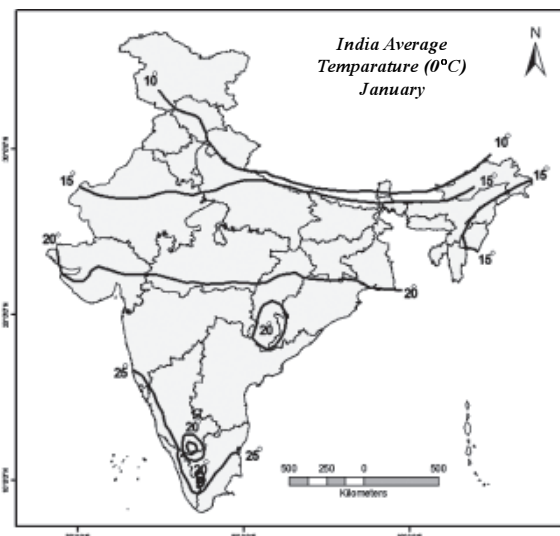
3 × 1 = 3

1. Answer All the questions.
2. Each Question Carries 1 mark.
1. Arrange the following states from North to South
Kerala, Telangana, Madhya Pradesh, Jammu-Kashmir
2. "Aila" is ia _____
i) Tsunami ii) Super Cyclone iii) Earthquake
3. Based on the relationship between the information in the first pair, complete the second pair
i) News Delhi : India
ii) Warsaw : _____

SECTION - II

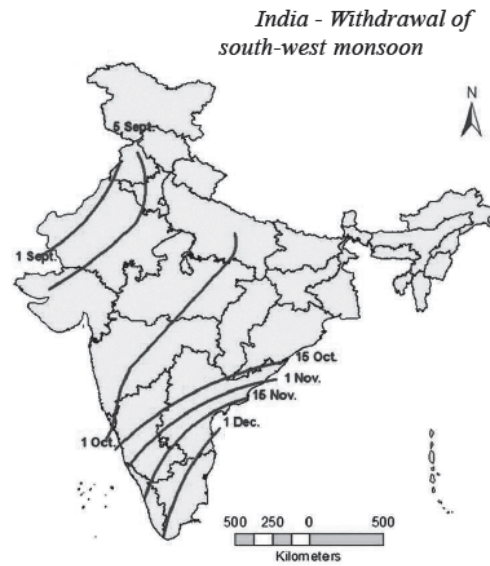
3 × 2 = 6

1. Answer All the questions.
2. Each Question Carries 2 marks.
4. Define, weather and Climate ?
5. Study the given map of India and answer



- i) Write any two states in which the lower temperature recorded during January?
- ii) Write the names of any two states in which the average temperature is 25°C?

6. Observe the map of India and answer the questions.



- i) In which state, the south-west monsoon enters first
- ii) Which state receives late monsoon?

SECTION - III

2 × 4 = 8

1. Answer All the questions.
2. Each Question Carries 4 marks.
7. Write about the seasons of India ?
8. What are the factors influencing climate and weather?

SECTION - IV

1 × 8 = 8

9. Read the paragraph and answer the question given.

"Intermittent showers in Hyderabad have bewildered meteorological officials, while climate change experts said it is increasingly becoming difficult to predict future weather events in the country. For the last 2 years, we have noticed that the weather systems are behaving in a peculiar way resulting in unusual weather events.

What are the reasons for Global Warming and Climate change?

Give suggestion to solve this problem.

SLIP TEST - 5

SOCIAL STUDIES

Class : X

Max.Marks : 25

Time : 45 min.

SECTION - I

3 × 1 = 3

1. Answer All the questions. 2. Each Question Carries 1 mark.
1. On the basis of origin, the drainage system in India can be broadly divided into two categories i) The Himalayan river system
ii) _____, what is the second one
 2. Odd one out
i) Indus river system ii) Ganga river system
iii) Brahma putra river system iv) Godavary river system
 3. Which is the largest river in the peninsular river system?

SECTION - II

3 × 2 = 6

1. Answer All the questions. 2. Each Question Carries 2 marks.
4. Write any two slogans relating to "Water Conservation".
 5. What were the water conservation activities taken up in Hiware Bazar ?
 6. "Should ground water be considered a common pool resources? Explain your view.

SECTION - III

2 × 4 = 8

1. Answer All the questions.
2. Each Question Carries 4 marks.
7. 70% of the earth's surface water is polluted - What are the reasons for pollution?
 8. Read the map and answer the following questions.



Ganga joining with Brahmaputra

- i) Write the names of the rivers shown in the map?
- ii) Which river flows in Assam ?
- iii) On which river bank Kolkata is located ?
- iv) Write any two tributaries of Ganga ?

SECTION - IV

1 × 8 = 8

9. Write an essay on Himalayan river system and Peninsular river system?

SLIP TEST - 6

(Lesson 6)

SOCIAL STUDIES

Class : X

Max.Marks : 25

Time : 45 min.

SECTION - I

$3 \times 1 = 3$

1. Answer All the questions.
2. Each Question Carries 1 mark.
1. What is density of Population ?
2. How is sex Ratio calculated ?
3. What is the population of India according to 2011 census?

SECTION - II

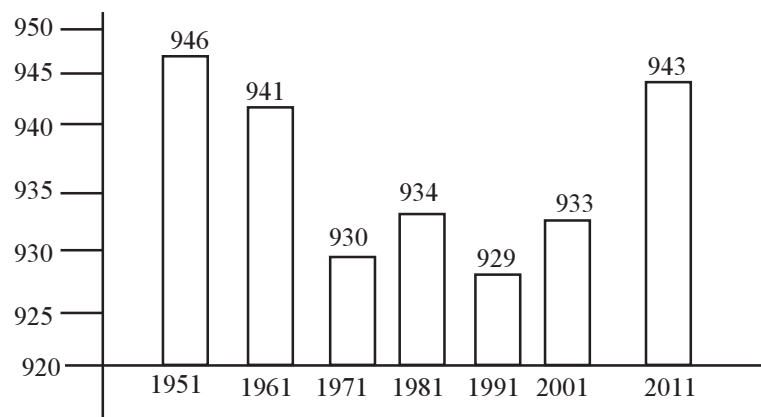
$3 \times 2 = 6$

1. Answer All the questions.
2. Each Question Carries 2 marks.
4. Which area of Andhra Pradesh have high density of population? Write any two reasons.
5. Prepare two slogans on "Control of population growth".
6. Do girls get similar opportunities for future studies as boys ?

SECTION - III

$2 \times 4 = 8$

1. Answer All the questions.
2. Each Question Carries 4 marks.
- 7.



Observe the graph and answer the following questions.

- 1) What does the above graph show ?
- 2) What is the Sex Ratio recorded in the year 1961 ?
- 3) What is the present sex Ratio in India ?
- 4) How many times the female number is recorded less than 1935 ?
8. How can better literacy affect the development of Nation ?

SECTION - IV

$1 \times 8 = 8$

1. Answer the following question question.
2. Each Question Carries 8 marks.
9. List out the impacts on society if sex ratio is too low or too high.

SLIP TEST - 7

(Lesson 7)

SOCIAL STUDIES

Class : X

Max.Marks : 25

Time : 45 min.

SECTION - I**3 × 1 = 3**

1. Answer All the questions.
2. Each Question Carries 1 mark.
1. What are called "Mega Cities" ?
2. Why do certain places attract more settlement ?
3. What is meant by "Urbanisation" ?

SECTION - II**3 × 2 = 6**

1. Answer All the questions.
2. Each Question Carries 2 marks.
4. What is an Aerropolis? Name two aerropolis emerging in India ?
5. What is a Settlement' ?
6. Name some form of Aeropoles which are emerging in the world ?

SECTION - III**2 × 4 = 8**

1. Answer All the questions.
2. Each Question Carries 4 marks.
7. Why has the population of Visakhapatnam grown significantly over the centuries ?
8. Define Site features and situation features. Give one example from the place you live in.

SECTION - IV**1 × 8 = 8**

1. Answer the following question question.
2. Each Question Carries 8 marks.
9. What are the problems of urbanisation ?

SLIP TEST - 8

(Lesson 8)

SOCIAL STUDIES

Class : X

Max.Marks : 25

Time : 45 min.

SECTION - I

$3 \times 1 = 3$

1. Answer All the questions.
2. Each Question Carries 1 mark.

1. What is meant by seasonal Migration ?
2. What is meant by Birth Place ?
3. How many people were migrated in India according 2001 Census ?

SECTION - II

$3 \times 2 = 6$

1. Answer All the questions.
2. Each Question Carries 2 marks.

4. What are Kopsis ?
5. Write two main reasons for Seasonal migration.
6. Why are sugarcane cutters employed only for Six months?
What work might they do during the other Six months of the year ?

SECTION - III

$2 \times 4 = 8$

1. Answer All the questions.
2. Each Question Carries 4 marks.

7. Do you think migrants are trouble makers in their destinations? Justify your answer.
8. Which of the following could be considered as seasonal migration ? Why ?
 - 1) Workers from Prakasam district to Hyderabad for mason work for a period of one year.
 - 2) Workers from one district to another district for harvesting work for a period of three months.
 - 3) Woman moving from their parent's house to husband's house due to marriage.

SECTION - IV

$1 \times 8 = 8$

1. Answer the following question question.
2. Each Question Carries 8 marks.

9. "Most of children of migrant families become dropouts". Do you agree with this statement ? Justify your answer.

SLIP TEST - 9

(Lesson 9)

SOCIAL STUDIES

Class : X

Max.Marks : 25

Time : 45 min.

SECTION - I

3 × 1 = 3

1. Answer All the questions.
2. Each Question Carries 1 mark.
1. How many square meters for one Hectare ?
2. What is standard unit of measuring Land?
3. Which is the main production activity in villages across India ?

SECTION - II

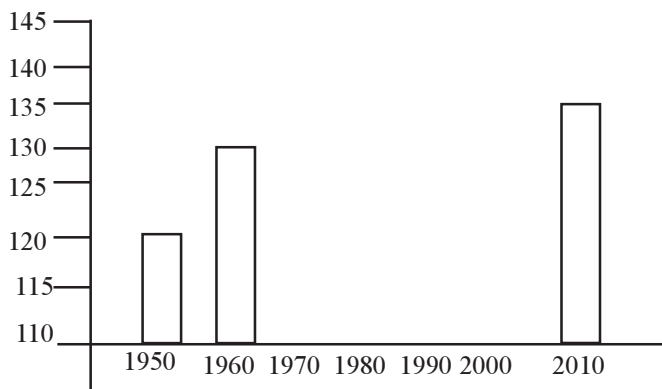
3 × 2 = 6

1. Answer All the questions.
2. Each Question Carries 2 marks.
4. What is meant by persian wheels?
5. Name any four Non-forming activities.
6. Expand "MGNREGA".

SECTION - III

2 × 4 = 8

1. Answer All the questions.
2. Each Question Carries 4 marks.
7. What are the reasons for 'Multiple Cropping' in rural areas ?
8. The following table shows the Land under cultivation in India in units of million hectares. Plot this on the graph provided. What does the graph show ?



Year	Cultivated Area
1950	129
1960	130
1970	140
1980	140
1990	140
2000	140
2010	140

SECTION - IV

1 × 8 = 8

1. Answer the following question question.
2. Each Question Carries 8 marks.
9. Water, a natural resource for production, particularly agricultural production, now requires greater capital for its use. Can you explain the statement ?

SLIP TEST - 10

(Lesson 10 & 11)

SOCIAL STUDIES

Class : X

Max.Marks : 25

Time : 45 min.

SECTION - I

3 × 1 = 3

1. Answer All the questions.
2. Each Question Carries 1 mark.
1. Expand W.T.O.
2. What are called coarse Careals ?
3. What is the Calories to be taken by the Urban people in a day ?

SECTION - II

3 × 2 = 6

1. Answer All the questions.
2. Each Question Carries 2 marks.
4. What is M.N. C. ?
5. What is meant by SEZ ?
6. What are the major functions of the Food Corporation of India ?

SECTION - III

2 × 4 = 8

1. Answer All the questions.
2. Each Question Carries 4 marks.
7. "The impact of globalisation has not been uniform". Explain this statement.
8. What indicates the given poster about food security



SECTION - IV

1 × 8 = 8

1. Answer the following question question.
2. Each Question Carries 8 marks.
9. Public Distribution system can ensure better ford Security for people". Explain.

SLIP TEST - 11

SOCIAL STUDIES

Class : X

Max.Marks : 25

Time : 45 mts.

SECTION - I

3 × 1 = 3

1. Answer All the questions.
2. Each Question Carries 1 mark.
1. In which state 'Kasargod' is located ?
a) Himachal Pradesh b) Kerala c) Gujarat
2. What is 'Endosulfen'.
a) pesticide b) Cool drink c) None
3. Chipko movement was started in the year
a) 1980 b) 1960 c) 1970

SECTION - II

3 × 2 = 6

1. Answer All the questions.
2. Each Question Carries 2 marks.
4. What is the main theme in the book "Silent Spring" ?
5. Write about various Nomadic Tribes and their native land / country ?
6. Mention the important issues ?

SECTION - III

2 × 4 = 8

1. Answer All the questions.
2. Each Question Carries 4 marks.
7. What is sustainable development ?
8. Write about 'Chipko Movement' ?

SECTION - IV

1 × 8 = 8

1. Answer the following question question.
2. Each Question Carries 8 marks.
9. Why do you think the effects of climate change may be felt by all countries ?

(or)

"Environment is crucially important for the lives and livelihoods of the local communities and the lifestyles of local community are harmonious with the environment" explain.

SLIP TEST - 12

SOCIAL STUDIES

Class : X

Max.Marks : 25

Time : 45 mts.

SECTION - I

3 × 1 = 3

1. Answer All the questions.
2. Each Question Carries 1 mark.
1. Allied Powers are
 - a) France
 - b) Britain
 - c)
2. Immediate cause for the outbreak of Second World War.
3. UNO was established in the year of
 - a) 1940
 - b) 1945
 - c) 1960

SECTION - II

3 × 2 = 6

1. Answer All the questions.
2. Each Question Carries 2 marks.
4. What is meant by militarism ?
5. What are the four principles of U.N.O. ?
6. Answer the following Questions based on the following Time line chart.

Russian Revolution	1917
Versailles Treaty	1919
Japan invaded Russia	1941
Formation of UNO	1945
End of the Second World War	1945

1. Which treaty was made in the year of 1919.
2. What are the two important incidents that took place in 1945.

SECTION - III

2 × 4 = 8

1. Answer All the questions.
2. Each Question Carries 4 marks.
7. Explain about Aggressive Nationalism.
8. Explain about Imperialism.

SECTION - IV

1 × 8 = 8

1. Answer the following question question.
2. Each Question Carries 8 marks.
9. Write a short note on various causes of two World Wars.

(or)

What are the different impacts of wars during the first half of 20th Century.

SLIP TEST - 13

SOCIAL STUDIES

Class : X

Max.Marks : 25

Time : 45 mts.

SECTION - I

3 × 1 = 3

1. Answer All the questions. 2. Each Question Carries 1 mark.

1. The name of Germany Parliament Reichstag then the name of Japan parliament
2. Hitler opposed to polices one is capitalism, Second one is
3. Stalin introduced Five Year plans in Russia.
a) 1928 b) 1930 c) 1932

SECTION - II

3 × 2 = 6

1. Answer All the questions. 2. Each Question Carries 2 marks.

4. What are the two policies followed by Stalin.
5. 'Soviets' means
6. Write about 'Socialism'.

SECTION - III

2 × 4 = 8

1. Answer All the questions.
2. Each Question Carries 4 marks.

7. Based on the following Map, answer the following questions.



Area under Japanese control 1942

1. In the given map which continents are observed by you ?
2. What are the areas under the control of Japan.
8. Write about great depression.

SECTION - IV

1 × 8 = 8

1. Answer the following question question.

2. Each Question Carries 8 marks.

9. Russian Revolution brought in many changes in their society. What were they and what challenges did they face ? (or)

Write about Rise of Hitler / nazism in Germany.

SLIP TEST - 14

SOCIAL STUDIES

Class : X

Max.Marks : 25

Time : 45 mts

SECTION - I

$3 \times 1 = 3$

1. Answer All the questions.
2. Each Question Carries 1 mark.
1. The founder of modern China.
a) Sun Yat - Sen b) mao Zedong c) Chiang Kaishek
2. In China regional military powers called as .
3. The peoples Republic of China was established in
a) 1959 b) 1949 c) 1950

SECTION - II

$3 \times 2 = 6$

1. Answer All the questions.
2. Each Question Carries 2 marks.
4. Name the to important political parties in China.
5. Guomindang indentified the four great needs ? What are they ?
6. What is the main features of Sun-Yet-Sen ?

SECTION - III

$2 \times 4 = 8$

1. Answer All the questions.
2. Each Question Carries 4 marks.
7. What are the three principles of Sun Yat Sen?
8. Explain about Land reforms in China.

SECTION - IV

$1 \times 8 = 8$

Answer any one of the the following question question.

9. Trace the changes in the role of Women Seen in China over the decades. Why is it similar of different from that of USSR and Germany ?

(or)

After the overthrow of monarchy, China had two different types of regimes. How were they similar or different ?

SLIP TEST - 15

SOCIAL STUDIES

Class : X

Max.Marks : 25

Time : 45 mts

SECTION - I

3 × 1 = 3

1. Answer All the questions.
2. Each Question Carries 1 mark.
1. The Muslim League was formed
 - a) 1906 b) 1926 c) 1936
2. The Socialist leader, who participated in 'Quit India' movement.
 - a) M.N. Roy b) J.P. Narayan c) J.L. Nehru
3. Muslim League declared 'Direct Action Day' on
 - a) 16-08-1946 b) 26-1-1950 c) 20-03-1965

SECTION - II

3 × 2 = 6

1. Answer All the questions.
2. Each Question Carries 2 marks.
4. What are the areas that 'Independent' government were proclaimed.
5. What are the causes for the partition of India ?
6. Why did the "Crips Mission" failed ?

SECTION - III

2 × 4 = 8

1. Answer All the questions.
2. Each Question Carries 4 marks.
7. Write about 'Tebhaga' Movement ?
8. How did Partition effected the lives of ordinary people ?

SECTION - IV

1 × 8 = 8

Answer any one of the the following question question.

9. How were workers and peasants mobilised during the last years of freedom struggle ?

(or)

Integration of various princely states into the new Indian nation was a challenging.

SLIP TEST - 16

CHAPTER-17

SOCIAL STUDIES

Class : X

Max.Marks : 25

Time : 45 mts

SECTION - I

3 × 1 = 3

1. Answer All the questions.
2. Each Question Carries 1 mark.
1. Constituent Assembly : ?
Drafting Committee : Dr. B.R. Ambedkar
Write the name of the person on the Answer Sheet.
2. Which among the following is not the feature of Federalism.
 - a) Division of power between the Central and States.
 - b) Existing the Central and State Governments side by side.
 - c) The supermacy of central laws over state laws on the subjects of concurent list.Identify the correct answer and write it on the answer sheet.
3. The makers of the constitution represented only certain regions of the country.
Correct the above false statement and write it.

SECTION - II

3 × 2 = 6

1. Answer All the questions.
2. Each Question Carries 2 marks.
4. Write any two basic ideals of Indian Constitution as reflected in the Preamble of the Constitution.
5. What is the significane of the Preamble of Indian Constitution ?
6. Mention any two provisions of Indian Constitution to facilitate Social Change.

SECTION - III

2 × 4 = 8

1. Answer All the questions.
2. Each Question Carries 4 marks.
7. How can you say that India adopts Parliamentary System of Democracy ?
8. Why do you think that Indian Constitution proposed the idea of Single Citizenship ?

SECTION - IV

1 × 8 = 8

Answer any one of the the following question question.

9. Write short notes on the basic principles of Indian Constitution.

SLIP TEST - 17

CHAPTER-18

SOCIAL STUDIES

Class : X

Max.Marks : 25

Time : 45 mts

SECTION - I

3 × 1 = 3

1. Answer All the questions.
2. Each Question Carries 1 mark.
1. After independence, the first General Elections took place in the year 1950.
Correct the above statement and write it.
2. General Elections in India are conducted by
 - a) Government of India
 - b) The President of India
 - c) Election Commission
 - d) The Parliament
3. Expand SRC.

SECTION - II

3 × 2 = 6

1. Answer All the questions.
2. Each Question Carries 2 marks.
4. Illiteracy effects elections at the time of exercising vote. How do you think this problem can be solved ?
5. What is Universal Adult Franchise ?
6. Write any two slogans on the need for every voter should utilise his right to vote ?

SECTION - III

2 × 4 = 8

1. Answer All the questions.
2. Each Question Carries 4 marks.
7. What were the institutional changes that came up after emergency ?
8. Emergency period was a set back to India Democracy. Explain this statement.

SECTION - IV

1 × 8 = 8

Answer any one of the the following question question.

9. What do you understand about one-party dominance? Would you consider it as dominance only in elections or also in terms of ideology ? Discuss with reason.

SLIP TEST - 18

CHAPTER-19

SOCIAL STUDIES

Class : X

Max.Marks : 25

Time : 45 mts

SECTION - I

$3 \times 1 = 3$

1. Answer All the questions.
2. Each Question Carries 1 mark.
1. Shiva Sena - YSRCP - AIDMK - BJP
Find the ODD out among the political parties above and write it.
2. A.B. Vajpaye, V.P. Singh, Rajiv Gandhi, H.D. DevaGoda
Arrange the above Prime Ministers in Chronological order.
3. D.M.K. - Tamilnadu
T.R.S. - ?
Complete the pair

SECTION - II

$3 \times 2 = 6$

1. Answer All the questions.
2. Each Question Carries 2 marks.
4. What do we mean by coalition Government ? Give an example.
5. Write the importance of 73rd and 74th Constitutional amendment.
6. Mention any two points of policy of liberalisation.

SECTION - III

$2 \times 4 = 8$

1. Answer All the questions.
2. Each Question Carries 4 marks.
7. Write any four welfare schemes implemented by Government of Andhra Pradesh.
8. How do different types regional aspirations draw from cultural and economic dimensions ?

SECTION - IV

$1 \times 8 = 8$

Answer any one of the the following question question.

9. What were the developments that weakened the inclusive nature of Indian polity ?
How is the ability to accommodate different communities and regional aspirations changing ?

SOCIAL STUDIES
SLIP TEST - 19
(Chapter - 20)

English Medium

Time : 45 mt

Max.Marks : 25

SECTION - I

3 × 1 = 3

1. Answer All the questions. 2. Each Question Carries 1 mark.
1. Which among the following statement about the Cold War is Wrong ?
a) rivalry between US and USSR b) USA and USSR engaged in direct war
c) Triggering of an arms race d) An ideological war between two supreme powers.
2. International Court of Justice : Hauge
World Health Organisation : ?
Write the correct Answer.
3. The Taliban Extremists belong to this country
a) Pakistan b) Bangladesh c) Sri Lanka d) Afghanistan

SECTION - II

3 × 2 = 6

1. Answer All the questions. 2. Each Question Carries 2 marks.
- 4.



- i) Name the International Organisation which bears the above emblem.
ii) Where is its Headquarters located ?
5. Complete the following table

Countries of USA	Countries of USSR
1. Britain	1. Poland
2.	2.
3.	3.

6. Expand NAM

SECTION - III

2 × 4 = 8

1. Answer All the questions. 2. Each Question Carries 4 marks.
7. "The ethnic conflicts affected India's relations with Sri Lanka" Justify.
8. Given the idea of democracy do you think a few countries should have special powers in making the decisions in the United Nations today ?

SECTION - IV

1 × 8 = 8

- Answer any one of the the following question question.
9. What are the different roles done by the United Nations in order to bring peace in the world.

SLIP TEST - 20

CHAPTER-21, 22

SOCIAL STUDIES

Class : X

Max.Marks : 25

Time : 45 mts

SECTION - I

3 × 1 = 3

1. Answer All the questions.
2. Each Question Carries 1 mark.
1. "Green peace" was the name of
 - i) a group of American soldiers
 - ii) a ship
 - iii) a treaty between USA and USSR
 - iv) a mountain in the Europe
2. Anti arrack movement - Andhra Pradesh
Maira Paibi movement - ?
Write the correct answer on Answer Book.
3. The public Information Officer at School Level is
 - i) The Mandal Educational officer
 - ii) The Headmaster of the School
 - iii) The teacher of the School
 - iv) The District Educational Officer

SECTION - II

3 × 2 = 6

1. Answer All the questions.
2. Each Question Carries 2 marks.
4. Write any two slogans on Environmental Protection.
5. 'The Right to Information Act resembles true spirit of Democracy! How do you justify this statement ?
6. Greenpeace aims at 'ensuring the ability of the earth to nature life in all its diversity' What does it suggest about environment ?

SECTION - III

2 × 4 = 8

1. Answer All the questions.
2. Each Question Carries 4 marks.
7. What are the common features of Social movements ?
8. Right to Information Act has certain limitations. What are they ?

SECTION - IV

1 × 8 = 8

- Answer any one of the the following question question.
9. Discuss the impact of Global Warming and the possible affects on the countries like Srilanka,India and Indonesia.