

**SSC PUBLIC EXAMINATIONS : 2021**  
**MODEL PAPER - 1**  
**SOCIAL STUDIES**

Class : X

Max.Marks : 100

Time : 3.15 Hrs.

**Instructions :**

1. 15 minutes are allotted for reading the Question Paper in addition to 3.00 hours for writing the answers.
2. All answer should be written in the Separate answer booklet.
3. There are 4 sections in the Question Paper.
4. There is internal choise in Section IV

**SECTION - I**

**12 × 1 = 12**

**Note :** 1. If any Question is answered more than once in this section, the earlier answer will only be considered.

2. Answer all Questions
2. Each Question Carries 1 mark.

1. India - K 2  
South India - ?

Complete the above pair with correct answer.

2. Teacher, Doctor, Vegetable vendor, Lawyer.

Find the ODD one out.

3. Many glaciers have melted in the Himalays during the last few years.

Write wheter this an example of Weather or Climate.

4. Which among the following is the west flowing river in the Deccan Plateau ?

- a) The Maha River
- b) The Mahi River
- c) The Cauveri
- d) Th Godavari

5.



Write your caption in the context of environment.

6. A) People go from India to Saudi Arabia to work as Technicians.  
B) Agricultural Labourers go from Bihar to Punjab.

Classify them into internal or International migration and write them on the Answer Sheet.

7.



Identify the person in the picture.

8. What were three principles of Sun Yat - sen in China ?
9. Who was the founder of Indian National Army ?

10.



What does the above logo suggest ?

11. i) The makers of the constitution represented only certain regions of the country.  
Correct the above statement and write it.
12. The Panchasheel agreement was signed between
  - i) India and Pakstan
  - ii) India and China
  - ii) India and Tibet
  - iii) India and BangladeshPick the correct answer and write it on the Answer Sheet.

## SECTION - II

8 × 2 = 16

1. Answer All the questions.
2. Each Question Carries 2 marks.
13. The Sun raises two hours earlier in Arunchal Pradesh as compared to Gujarat in the West, but the Clock shows the same time. How does this happen?
14. Write the following in the order of Heirarchy.  
Towns, Villages, Mega cities, Hamlets.
15. Write any two non-farm activities of your area.
16. What do you mean by Minimum Support Price ?
17. Write any two slogans on the importance of Right to Vote ?
- 18.



Observe the above map and answer the following questions.

- i) Name the neighbouring nation of India which went under the control of Japan during World War - II
  - ii) Name the Ocean which was under the control of Japan during World War - II
19. The following were the features of world great Economic Depression.  
1) Over production 2) \_\_\_\_\_ 3) \_\_\_\_\_  
Write two other features of World Economic Depression.
20. What is the importance of 'Tebhaga Movement' ?

### SECTION - III

8 × 4 = 32

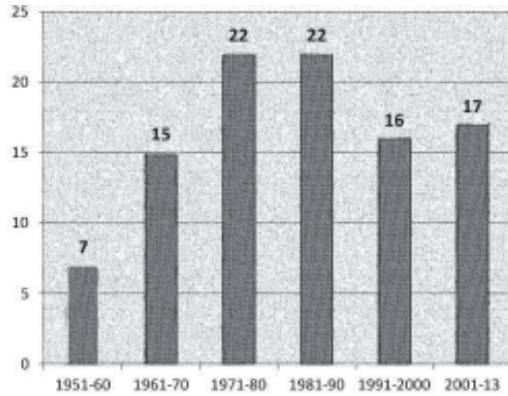
1. Answer All the questions.
2. Each Question Carries 4 marks.
21. Supposing you find two people arguing : One is saying globalisation has hurt our country's development. The other is telling, globalising is helping India develop. How would you respond to these arguments ?
22. Write any four programmes launched by the Government of Andhra Pradesh for the welfare of School Children.
23. List out the impacts on society if sex ratio is too high or too low.
- 24.



Observe the above map and answer the following.

- i) What is the Northern boundary of Deccan plateau ?
  - ii) Which is located between the Eastern Ghats and Western Ghats ?
  - iii) Name the river flowing between Vindhya mountains and Satpura mountains.
25. What was the role of the UNO in promotion of World Peace ?
26. Russian revolution brought in many changes in the society. Write any four changes.

27.



Observe the above and answer the following questions.

- In which decades were the highest number of constitutional amendments made ?
  - How many total No. of amendments were made from 1950 to 2013.
28. "Democracies have been identified as most prominent political system across the world. Do you agree or disagree ? Explain the reason.

#### SECTION - IV

5 × 8 = 40

- Answer All the questions.
  - Each Question Carries 8 marks.
29. If the Himalayas would not have been there in its position what could have been the climatic conditions of Indian sub-continent ?

(or)

"Last, but not the least, the key to environmental problem lies in changing lifestyles that will minimise the waste and pollution"

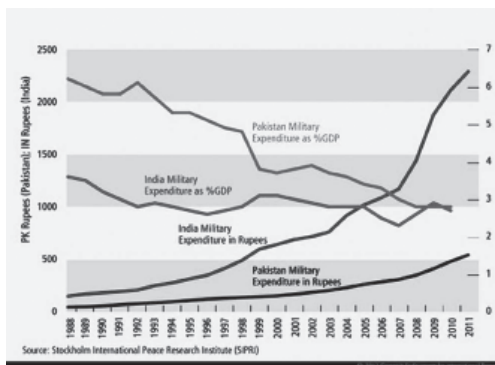
find out about various ways in which the problem of garbage and emissions are being dealt with.

30. Why do you think parents accord less priority to girls education as compared to boys ?

(or)

How is climate causing Global Warming ? Suggest measures to minimise the influence of Global Warming.

31.



Observe the graph and answer the following.

- What does the graph explain ?
- Which country military is more ?

iii) Which country expenditure in GDP is more ?

iv) Is there any arms race between India and Pakistan as per the above graph ?

(or)



Time line

Observe the time line chart and answer the following.

i) When did the World War - II break out ?

ii) Name the important events in the year 1945.

iii) Name the treaty that took place after World War - I

iv) Name the International Organisation which was founded after World War - II

32. Write a short notes on the causes of two World Wars. Do you think any of the features are prevalent today in countries around world ?

(or)

Write a short notes on the basic principles of our Indian Constitution.

33.a) Mark the following on the outline map of India.

1) The hills where the eastern ghats and western ghats join together.

2) The state which has Jaipur as the Capital

3) Bhopal

4) Circar Coast

(or)

5) Maova plateau

6) Delhi

7) The longest Himalayan river

8) The Arvali mountains

33.b) Mark the following on the outline map of the World

1) The country which was ruled by Hitler

2) The country which did not enter world wars at the beginning

3) Japan

4) The Indian Ocean (or)

5) Portugal

6) Brazil

7) The neighbouring nation which formed in 1971 after India - Pakistan War

8) The permanent member country of the UNO from Asia Continent.

**ANSWERS**  
**PRINCIPLES OF VALUATION**  
**SOCIAL STUDIES**

Class : X

Max.Marks : 100

Time : 3.15 Hrs.

**SECTION - I**

**12 × 1 = 12**

**Note :** Answer all Questions. Each Question Carries 1 mark.

1. Anaimudi
2. Vegetable vendor
3. Climate
4. The Maha River
5. Use environment for need not for greed.  
Environment protection is must for the existence of human beings.  
Save the environment and you will save the future.

**Note :** Any other relevant caption may be awarded 1 marks.

Any of the above caption get one mark

6. A) International Migration  $\frac{1}{2}$  M  
B) Internal Migration  $\frac{1}{2}$  M  
Correct Answer of the above two carry 1 Mark.
7. Dr. Babu Rajendra Prasad.
8. San - Nationalism  
Min - Democracy  
Chui - Socialism  
Any two points bring 1 Mark
9. Subhash Chandra Bose
10. Women Enfranchisement movement at International level (or)  
Internationa Women's suffragist movement
11. The makers of the constitution on represented all regions of the nation.
12. India and China

**Note :** Each correct answer of the above gets one mark  $12 \times 1 = 12$  marks.

**SECTION - II**

**8 × 2 = 16**

13. i) India has longitudinal extent of  $30^\circ$   
ii) The eastermost state is Arunachala pradesh and The westermost state is Gujarat.  
iii)  $30^\circ$  extent of Logitude carries a time lage of 2 hours.

iv) The Indian Standard Time is measured from  $82 \frac{1}{2}$  Longitude.

Therefore the clock shows the same time.

Each point carries  $\frac{1}{2}$  mark.  $4 \times \frac{1}{2} = 2M$

14. Mega cities

Towns

Villages

Hamlets.

Each correct order point carries  $\frac{1}{2}$  mark.  $4 \times \frac{1}{2} = 2M$

15. i) Workers of the MGNREGA    ii) Dairy    iii) Transportation    iv) Pomakers  
v) Shop keeping    vi) Weaving    vii) Basket making

Note : Any of the above two brings 2 marks  $2 \times 1 = 2M$

Any other relevant may be valued.

16. The Price announced by the Government of India every year to purchase the surplus of certain food grains is called Minimum Support Price.

Correct definition carries 2 Marks.

17. Vote will change your fate.

Never sell your vote to money and liquor.

Vote is more powerful than bullet.

Any two of the above or any other relevant two get 2 Marks.

$2 \times 1 = 2M$

18. i) Burma    ii) Pacific Ocean

Each correct answer gets 1 Mark  $2 \times 1 = 2M$

19. Decline in Demand

Unemployment

Low purchasing power of the people

Any of the above two points get 2 Marks.  $2 \times 1 = 2M$

20. i) The poor peasants in Bengal took the land of bigger lands to cultivate.

ii) They demanded that share of harvest should be increased to two portions out of three.

This is called Tebhaga Movement.

$2 \times 1 = 2M$

### SECTION - III

**8 × 4 = 32**

21. 1) Globalization has hurt our country's development because

a) Small producers get acute competition from cheaper imports.

b) Workers have no job security and unemployment may rise because the MNCs may move over to other countries.

2) Globalization is helping India to develop.

a) The Consumer will get quality of products at lower prices because of the competition.

b) Variety of goods are available in the market so that the consumer can have the choice of his own.

c) Employment will increase if the new foreign companies come to India.

The affect of Globalisation are not favourable, but Globalization has becomes unavoidable. The Government shall take care of the interests of Indian consumers.

First Opinion	:	Any one point	$1 \times 1 = 1$
Second Opinion	:	Any two point	$2 \times 1 = 2$
Conclusion	:	One mark	1
Total	:		$1 + 2 + 1 = 4M$

22. i) Ammavodi

ii) New menu for MDM in the schools

iii)jaganna Vidya Kanuka

iv)Providing freem uniform to all children of all classes

Each point carries 1 mark  $4 \times 1 = 4M$

23. i) Sex ratio indicates hidden form of descrimination.

ii) Women and girls get inequal opportunities of development.

iii)Child marriages will be encouraged.

iv)It leads to gender imbalance in the marriage system.

v) it leads to reduction in birth rate.

Any four points bring 4 Marks  $4 \times 1 = 4M$

24. i) Malwa Pleateau

ii) Deccan Pleateau

iii)The Narmada river

iv)Tne North West Directions.

Each correct answer carries 4 Marks  $4 \times 1 = 4M$

25. The role of UNO is promoting World Peace :

i) The United Nations Organization focussed on avoiding quarrels among its member countries.

ii) It also tried to stop conflicts among the nations by negotiations.

iii) Indonesia achieved Independence under the direction of United Nations Organisation.

iv) The dispute between the Jews and Arbas was solved by creating seperate nation 'Israel' for the Jews.

v) It averted war between England and Egypt on the issue of Suez Canal.

vi) It recognized Namebia as a special nation by separating it from South Africa.



- vii) It helped Congo to get liberation from Belgium.
- viii) It helped Kuwait to liberation from Iraq.

Any four points carry 4 Marks  $4 \times 1 = 4M$

26. i) Planned economic policies.  
ii) Surplus lands were taken away from landlords.  
iii) mass cultivation was promoted.  
iv) All industries and Banks were nationalised.  
v) Work is provided for every person.  
vi) A new class called 'The middle class people' came because of industrialisation.  
vii) Public Health care was provided.  
viii) An extended school system was developed.

Any four points carry 4 Marks  $4 \times 1 = 4M$

27. i) 1971 - 80, 1981 - 90  
ii) 99 amendments

Each correct answer carries 2 Marks  $4 \times 1 = 4M$

28. i) Yes, I think democracies are able to take care of kinds of people.  
ii) The system of Democracy is widely accepted all over the World.  
iii) Any kind of Change in power is possible through votes.  
iv) Peace and security prevails in all democratic countries all over the world.  
v) The Governments are bound to take the policies which are favourable to people only.

The point No. 1 carries 1 Mark  $1 \times 1 = 1M$

Any 3 of the remaining carries 3 Marks  $3 \times 1 = 3M$

4M

#### **SECTION - IV**

**5 × 8 = 40**

29. If the Himalayas are not in the present position.
- i) there could have been no tropical monsoon type of climate in the Indian Sub-continent.
  - ii) the cold air masses from central Asia would have entered the India.
  - iii) the entire India could have become a desert.
  - iv) there could have been no Himalayan rivers which give us rainfall in the summer also
  - v) the agricultural production could have become much lesser in the absence of the monsoon.

Any four points carry 8 Marks  $4 \times 2 = 8M$

(or)

The following are the ways in which the problems of garbage and emission are being dealt with -

- i) Garbage should be reused properly.
- ii) Dump the garbage at the dumpyards only.
- iii) Use the green box and red box properly at home and cooperate with the local bodies.
- iv) Industrial wastage should be decomposed properly.
- v) Tax may be imposed on those Industries or factories who do not decompose their wastage properly.
- vi) Everyone should use CNG or Solar vehicles instead of petrol and diesel.
- vii) Use Electrical Battery Vehicles.
- viii) Go for Organic farming instead of use of pesticides and fertilizers.
- ix) Awareness programme shall be strengthened.

Any eight points 8 Marks  $8 \times 1 = 8M$

30.
  - i) Parents think that Boy is an asset and Girl is a liability.
  - ii) parents also believe that boy would spread their clan.
  - iii) They believe that boy is their heir.
  - iv) The marriage system allows the girl to live with his husband only.
  - v) The girl should go to other's house by changing her surname also.
  - vi) Parents feel difficult that if the girl is well educated, it would be difficult to find a suitable husband.
  - vii) Girls are engaged to look after the homely works and younger siblings.
  - viii) Child marriages in rural areas because of the poverty of the parents.
  - ix) Existing insecurity conditions to the female in the society.
  - x) Gender Bias.

In order to overcome all the above conditions, an attitude towards women should be changed. This change is possible through education of girl child.

'BETI PADA VO BETI BACHA VO'

Any eight points 8 Marks  $8 \times 1 = 8M$

(or)

#### **Climate Change - Global Warming**

- i) When the Global temperature increases, the ice in the Antarctic region melts.
- ii) Methane under the ice escapes into atmosphere and temperature is raised.
- iii) This causes more ice to melt and so on and so forth.
- iv) Release of Chloro Fluoro Carbons can destroy the Ozone layer.

Four points carry 4 Marks  $4 \times 1 = 4M$

#### **Measure to Minimise Influence of Global Warming :**

- i) Reduce the use of fossil fuels.
- ii) Encourage the use of non-consumable energy

- iii) Promote afforestation
- iv) Control the release of CFC's
- v) Avoid the use of fertilizers and chemicals.
- vi) Recycle the industrial waste

Any Four points carry 4 Marks  $4 \times 1 = 4M$

Total  $4 + 4 = 8$  Marks

31. i) The military expenditure growth in India and Pakistan (or) military expenditure in India and Pakistan.
- ii) India
  - iii) Pakistan
  - iv) Yes, there is arms race between India and Pakistan.

Each correct answer carries 1Mark  $4 \times 1 = 4M$

(or)

- i) 1939
- ii) a) End of the World War - II  
b) formation of UNO

Each correct answer carries  $1 \times \frac{1}{2} = 1M$

- iii) Versailles treaty
- iv) United Nations Organisation

Each correct answer carries 1Mark  $4 \times 1 = 4M$

32. **Causes of Two World Wars :**

The causes and circumstances for two world wars are similar but the immediate provocations are different.

**Common Cause :**

- i) When one nation is proud of itself and wanted to establish its supermacy on other nations, it is aggressive Nationalism.
- ii) The German and the Italins developed proud and hatred towards other nations under the leadership of the Hitler and Mussolini.
- iii) This lead to the formation of power blocks.

**Imperialism :**

- i) The European Nations tried to occupy other nations to get raw material and markets for their goods.
- ii) This created conflict and competetion among the European powers.

**Secret Alliances :**

- i) Germany, Austria and Hugary formed into Triple Alliance.
- ii) England France and Russia formed into Triple Ententee.
- iii) The same blocks carried out in World War - II with minor changes.

**Militarism :**

- i) Every Country built massive standing armies.
- ii) They compete with each other on gathering armaments.
- iii) They built a mindset among the pupil to do wars.
- iv) After humiliation in the treaty of Versailles, Germany was converted into the workshop of war weapons.

Some of the causes still prevalent today. The factors of Nationalism, militarism and Capitalism are still prevalent in countries like China, Pakistan, Korea and the Arab Nations. There is no possibility for another World War the Democratic nations do not want a war.

Introduction carry 1Mark  $1 \times 1 = 1M$

Each four headings with the above points or the brief points carry  $4 \times 1\frac{1}{2} = 6M$

Final conclusion  $1 \times 1 = 1M$

Total = 8M

(or)

**Basic Features of our Constitution :**

- i) India is the country which follows the Parliamentary System in the World.
- ii) Every citizen of India is entitled to enjoy Fundamental Rights.
- iii) Every Citizen should follow 10 fundamental duties.
- iv) India follows only Single Citizenship.
- v) Indian constitution divides the powers between the Centre and State Government. This is the Federal principle of the constitution.
- vi) India has independent judiciary system with the power of 'Judicial Review'.
- vii) India Constitution provides certain guide lines to the Centre and the State Governments in the interest of the welfare of the pupil. They are called Directive Principles.
- viii) Right to vote is given every citizen of India as the age of 18 yrs. This is called 'Universal Adult Franchise'.

Each Point carries 1Mark  $8 \times 1 = 8M$

33.a) 1) Nilgiri Hills 2) Rajasthan 3) Bhopal 4) Coromandel coast

(or)

5) The Malwa Plateau 6) Delhi 7) The Indus 8) The Aravali mountains

Each correct location carries 1 Mark  $4 \times 1 = 4M$

33.b) World Map

1) Germany 2) U.S.A. 3) Japan 4) The Indian Ocean

(or)

1) Portugal 2) Brazil 3) Bangladesh 4) China

Each correct location carries 1 Mark  $4 \times 1 = 4M$

# SSC PUBLIC EXAMINATIONS : 2021

## MODEL PAPER - 2

### SOCIAL STUDIES

Class : X

Max.Marks : 100

Time : 3.15 Hrs.

#### Instructions :

1. 15 minutes are allotted for reading the Question Paper in addition to 3.00 hours for writing the answers.
2. All answer should be written in the Separate answer booklet.
3. There are 4 sections in the Question Paper.
4. There is internal choise in Section IV

#### SECTION - I

12 × 1 = 12

**Note :** 1. If any Question is answered more than once in this section, the earlier answer will only be considered.

2. Answer all Questions
2. Each Question Carries 1 mark.

1. India - K 2  
South India - ?

Complete the above pair with correct answer.

2. Theacher, Doctor, Vegetable vendor, Lawyer.

Find the ODD one out.

3. Many glaciers have melted in the Himalays during the last few years.

Write wheter this an example of Weather or Climate.

4. Which among the following is the west flowing river in the Deccan Plateau ?

- a) The Maha River
- b) The Mahi River
- c) The Cauveri
- d) Th Godavari

5.



Write your caption in the context of environment.

6. A) People go from India to Saudi Arabia to work as Technicians.  
B) Agricultural Labourers go from Bihar to Punjab.

Classify them into internal or International migration and write them on the Answer Sheet.

7. Example for allied countries.  
America, Russia, Britain ..... followed by Which country.
8. Arrange the following in the correct chronological order.
  1. The formation of the Peoples Republic of China. 2. Overthrown of Manchu Empire.
  3. The attack of Japan on China.
9. What was the immediate cause for the outbreak of First World War.
10. Identify the Person in the picture who founded the Telugu Desam Party in A.P.



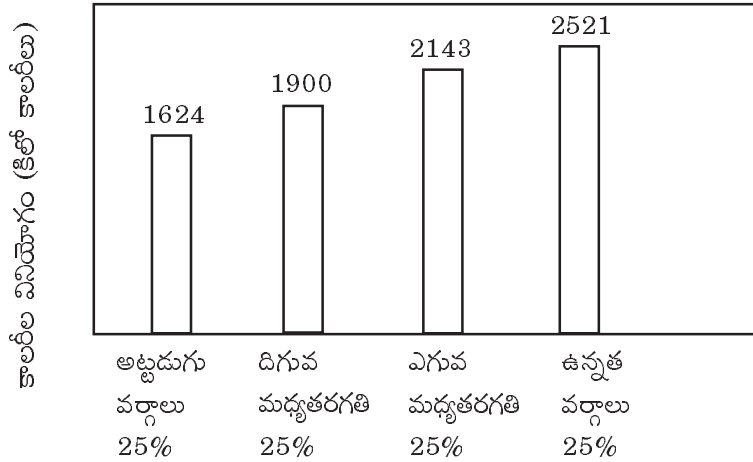
11. Who said that "Our of every Rupee Spent on the Poor barely 15 paise reaches them|
12. The following Picture indicates.



### SECTION - II

8 × 2 = 16

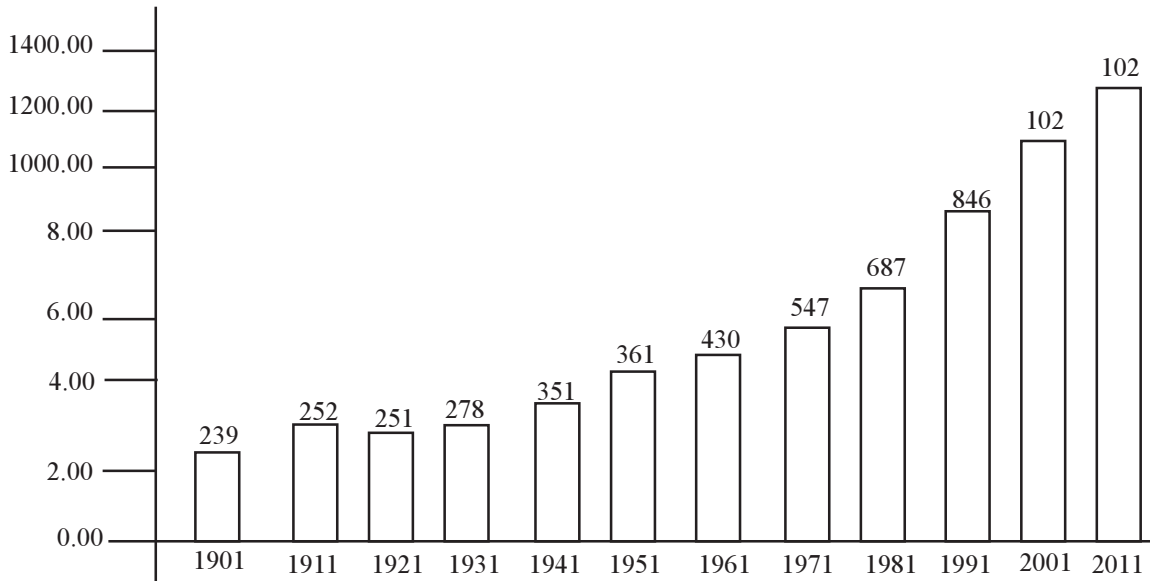
1. Answer All the questions. 2. Each Question Carries 2 marks.
13. Name the important lakes in the East Coast.
14. What do you mean by pre-monsoon showers or mango showers.
15. What do you mean by Sex Ratio.
16. Answer the following Questions base on the following table.



- 1) In rural areas, the people belonging to bottom quarter take howmany Kilo calories per day ?
- 2) Which group of the peole taking 2521 kilo calories take per day.
17. Arrange the following incidents in the correct chronological order.
  - a) Great Depression
  - b) Russion Revolution
  - c) Formation of UNO
  - d) Formation of League of Nations
18. Write any two examples for National Political Parties in India.
19. Write any four supplementary organs of UNO.
20. It was on 28 January, 1948 at the time of an unsuccessful attempt on his life was made what did Gandhiji Say ?

**SECTION - III****8 × 4 = 32**

1. Answer All the questions.
2. Each Question Carries 4 marks.
21. How are human activities contributing to global Warming.
22. Which type of welfare and development schemes are implementing by Andhra Pradesh government.
23. Answer the following questions based on the graph given below.



- 1) In the above graph which information is mentioned.
- 2) In which decade did the population decrease ?
- 3) From which year onwards is the population continuously increasing ?
- 4) What could be the reasons for the speed with which increases took place after Indian Independence ?
24. Write about important environmental at issues.
25. Write about United Nations Organisation.
26. Answer the following questions based on the table given below.

Beginning of the First World War	1914
Russian Revolution	1917
Treaty of versailles	1917
Formation of League of Nations	1919
Rise of Hitler in Germany	1933
Breakout of IInd World War	1939
German invasion of USSR	1942
Formation of UNO	1945
End of Second World War	1945

- 1) In the above time line chart which international peace organisations. you observed.
- 2) In which years First World War, Second World War started.
27. What are the basic features of Social Movement.
28. How were workers and peasants mobilised during the last years of freedom struggle.

### SECTION - IV

**5 × 8 = 40**

1. Answer All the questions.
2. Each Question Carries 8 marks.
29. What is the influence of Himalayas on Indian agriculture ?

(or)

Why do you think Parents accord less priority to girls education as compared to boys ?

30. How is the service sector different from other sectors ? Illustrate with few examples.

(or)

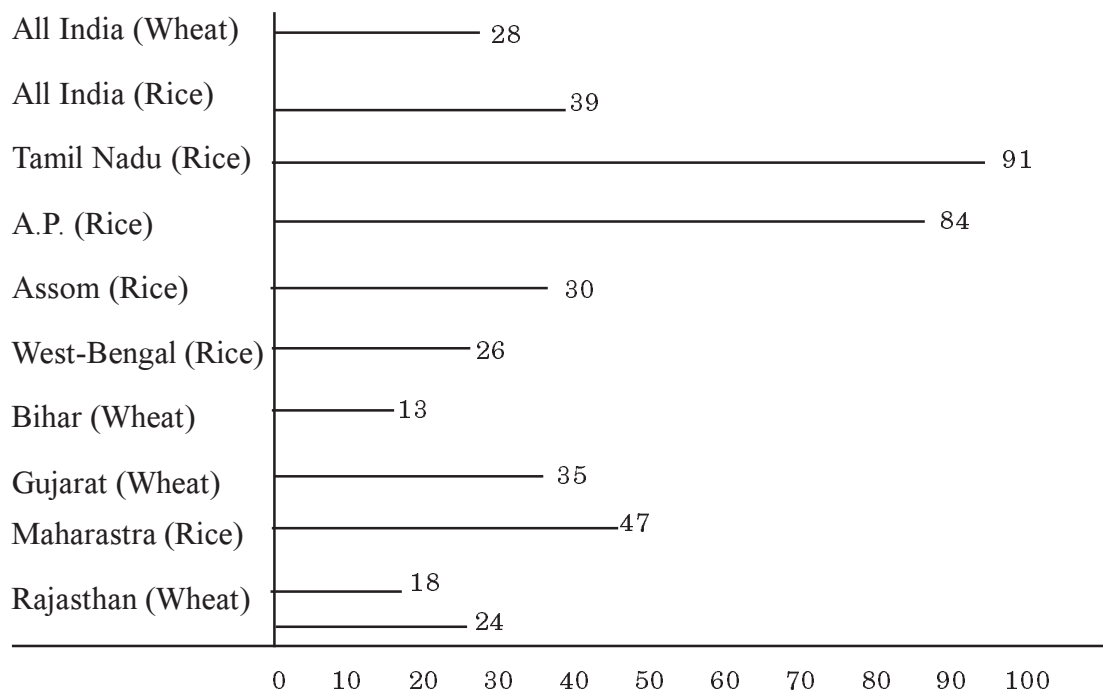
How is climate change causing global warming suggest measures to minimise the influence of global Warming ?

31. Write about various causes of two World Wars ?

(or)

Make a list of various reasons for the Partition of the country ?

32. Answer the following Questions based on the following.

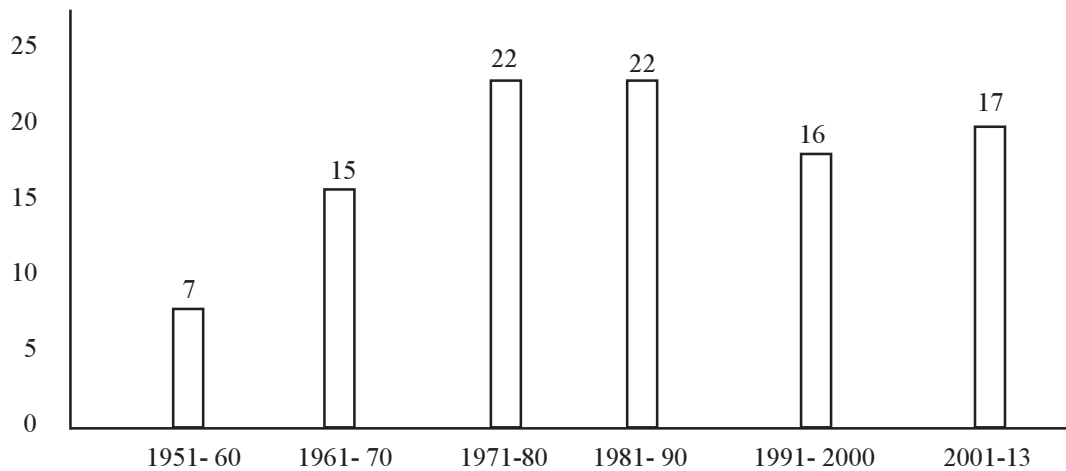


- 1) For all India howmuch percentage of people are getting rice from the ration shops.
- 2) For all India how much percentage of people are getting wheat from the ration shops.
- 3) In which state 26% percentage of people are getting rice from the ration shops.
- 4) What are the two states that are getting highest percentage of rice from the ration shops.



(or)

Answer the following questions based on the following graph.



- 1) In which year Constitution came into force.
- 2) How many amendments were made upto 2013.
- 3) During the decades of 1971-'80, 1981-'90 how many amendments were made.
- 4) The above graph shows which aspect.

33.a) Mark the following on the outline map of India.

- 1) Circar Coast
- 2) The State which has Bangalore as Capital
- 3) Arabian Sea
- 4) Lucknow

(or)

- 1) The highest Peack in Arvali ranges
- 2) The river Ganga
- 3) Western Ghats
- 4) Indira Point

33.b) Mark the following on the outline map of the World

- 1) The country which was ruled by Hitler
- 2) The country 1917 revolution took place
- 3) NewYork
- 4) Atlantic Ocean

(or)

- 1) Africa Continet
- 2) Pacific Ocean
- 3) Japan
- 4) Austria

**SSC PUBLIC EXAMINATIONS : 2021**  
**MODEL PAPER - 3**  
**SOCIAL STUDIES**

Class : X

Max.Marks : 100

Time : 3.15 Hrs.

**Instructions :**

1. 15 minutes are allotted for reading the Question Paper in addition to 3.00 hours for writing the answers.
2. All answer should be written in the Separate answer booklet.
3. There are 4 sections in the Question Paper.
4. There is internal choise in Section IV

**SECTION - I**

**12 × 1 = 12**

**Note :** 1. If any Question is answered more than once in this section, the earlier answer will only be considered.

2. Answer all Questions
2. Each Question Carries 1 mark.

1. Jaipur                                 -         Continental climate  
Chennai                                 -         ?

Complete the pair with suitable answer.

2. Arrange the following states from North to South.  
Odissa, Tamilnadu, Andhra Pradesh, West Bengal
3. a) Sex ratio refers to how many femals are for 100 males.  
b) Density of population show how many persons live for every square kilometre.
4. This is not an aim of Chipko movement.  
A) Protection of soil and water         B) Protection of forests  
C) Protectio of environment             D) Protection of minmerals
- 5.

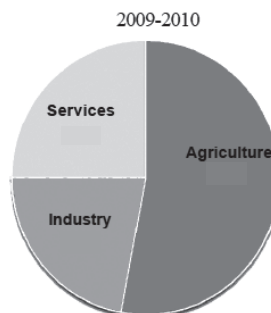


Write your caption in the context of Development.

6. Observe the below pie chart.

The pie diagram shows the sectoral shares of employment.

Which sector does provides highest employment ?



7. The purposal of the New deal is to help the victims of the world wars all over the world. Correct the underlined part and write the statement completely on the answer book.

8. 'Guomindang' party in China identified 'four great needs'.

They are 1. Cloghing, 2. Food, 3. Housing, 4. .... write the fourth one.

9.



Identify the person form the left.

10. Who died for the formatjion of seperate state for Telugu Speaking people after fasting of 58 days ?

11. LTTE is militant Organisation in the country of

A) Pakistan                      B) India                      C) Bangladesh              D) Sri Lanks

Write the correct answer.

12. Meira Paibi movement : Manipur

Anti-arract movement : Keerala

Find the mis-matched pair and correct it.

## SECTION - II

8 × 2 = 16

1. Answer All the questions.

2. Each Question Carries 2 marks.

13. i) Which islands are named after this bird in India ?

ii) In which sea are they located in India ?



14.

**Comparison of two Countries**

Country	Monthly income of citizens in 2001 (in Rupees)					
	I	II	III	IV	V	Average
Country A	9500	10500	9800	10000	10200	
Country B	500	500	500	500	48000	

Observe the above table and answer the following questions.

- i) Find the average of country 'A' and Country 'B'.
- ii) Which country has higher economic inequalities ?

15. Write two slogans on 'Food Wastage'.

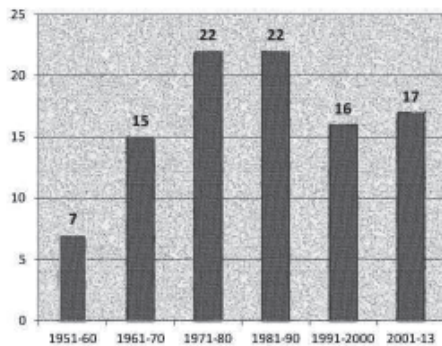
16. What do you mean by 'Minimum Support price' ?

17. Arrange the incidents in the chronological order.

Russian Revolution, the murder of Ferdinand, the treaty of Versailles, the formation of League of Nations.

18. Write any two features of federalism in Indian Constitution.

19.



Observe the above Graph and answer the following.

- i) How many amendments were made to our Indian Constitution upto 2013 ?
- ii) Is there any change in the number of amendments made in 1971-80 and 1981-90 ?

20. Make a list of two reasons for partition of India.

**SECTION - III**

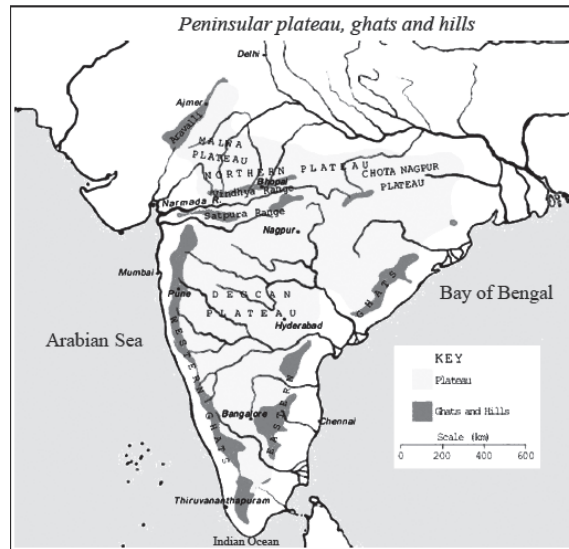
**8 × 4 = 32**

1. Answer All the questions.

2. Each Question Carries 4 marks.

21. Write any four welfare schemes launched by Government of Andhra Pradesh for School children.
22. Globalisation will continue in future. Can you imagine what the world would be after twenty years from now ?
23. Most children of migrant families become drop-outs' Do you agree with this statement? Justify your answer.

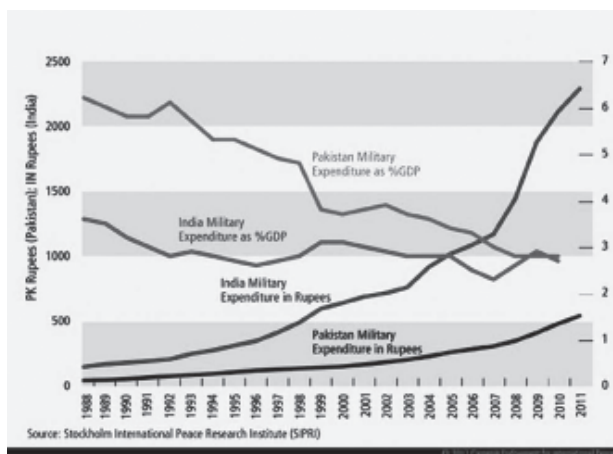
24.



Observe the above map and answer the following questions.

- i) In which direction are the Aravali mountains located ?
  - ii) What is located between the Eastern Ghats and the Western Ghats ?
  - iii) Name the plateau which is located in the North East direction of the Peninsular Plateau.
  - iv) What is the shape of the Deccan Plateau ?
25. Make a table to show allies, axis powers and Triple alliances and Triple entente countries on different sides of World Wars.  
Austria, USSR, Germany, Britain, Japan, France, Italy, U.S.A
26. Mention any four British colonialist practices which would reflect their 'Divide and Rule' policy.
27. How do you think RTI would help in improving and monitoring the work of the Governments ?

28.



Observe the above Graph and answer the following questions.

- i) Which country's military expenditure is more ?
- ii) Which country's military expenditure is more in terms of GDP %?

iii) What conclusion can we arrive after going through the above graph & with regard to the military expenditure ?

iv) Does the above graph suggest peace between India and Pakistan ?

#### SECTION - IV

5 × 8 = 40

1. Answer All the questions.

2. Each Question Carries 8 marks.

29. "Human activities contribute to global warming" Do you agree ? or Differ ? Support your answer.

(Or)

"Rapid extraction of minerals and other natural resources would adversely impact the future development process". Do you Agree ? Support your answer.

30. What were the political change brought under Nazi Rule in Germany ?

(Or)

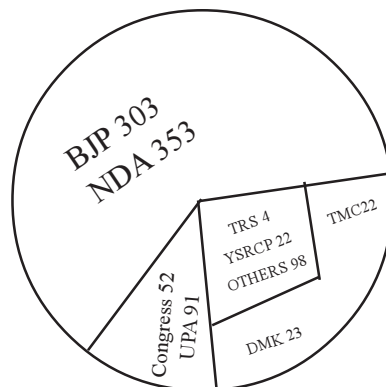
What measures were taken to bring in socio-economic change during the initial years of Independence ?

31. The workers in the unorganised sector need protection on the following issues : wages, security of Job. Explain with examples.

(Or)

How are the Eastern coastal plains and Western coastal plains similar or different ?

32. Observe the given pie diagram.



Answer the following questions.

i) Which political party is able to form Government after 2019 Lok Sabha Elections ?

ii) Which political party is able to become a Principle opposition party in Lok Sabha ?

iii) How many seats does NDA alliance secure in Lok Sabha ?

iv) Name the Regional party which got highest number of seats in Lok Sabha, 2019.

(Or)



Observe the chart and answer the following questions.

i) What was the immediate result of civil war in Russia ?

ii) Say whether yes or No.

A) The Bloody Sunday happened after abdication of Tsar

iii) After how many years of formation of Comintern in USSR, did the collectivisation begin ?

iv) What was the period of Civil War in Russia ?

33. Locate the following on the outline map of India.

A. 1) The Strait separating Sri Lanka from India.

2) The state which has Kolkata as its Capital

3) K 2 Peak

4) Ladakh (Or)

1) The Eastern Ghats

2) Delhi

3) The great desert of India

4) Goa

B. Locate the following on the outline map of India.

1) The nation which experienced Atom Bomb in the World War – II

2) France

3) The United Nations permanent member nation from Asia.

4) The Ocean separating European Continent and the American Continents

(Or)

1) The birth land of Fascism.

2) The country having longest boundary with India

3) Canada

4) Spain